


Lattice Multiplication

4-digit by 3-digit: S3

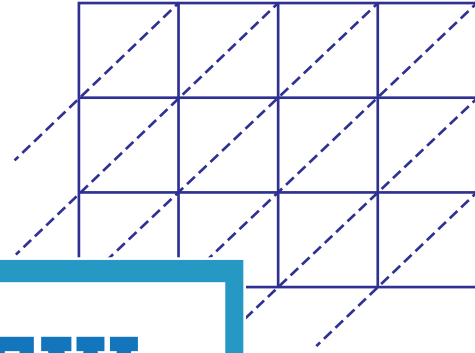
Use lattice multiplication method to find the product in each problem.

1) 4365×692



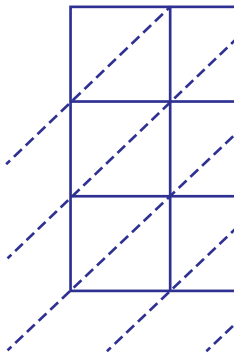
$4365 \times 692 =$ _____

2) 7123×930

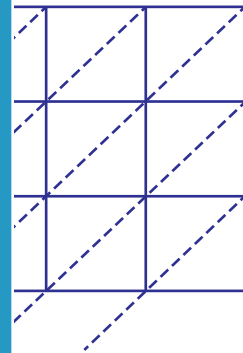


$=$ _____

3) 9487×163

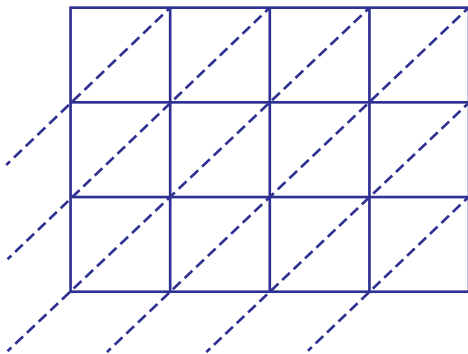


$9487 \times 163 =$ _____

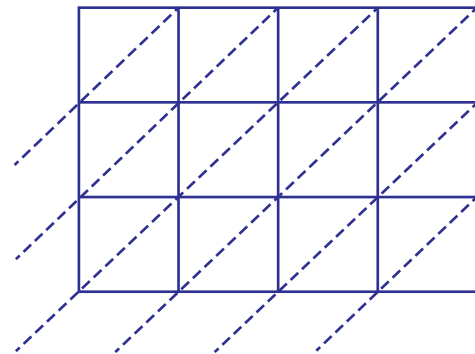


$=$ _____

5) 1579×351



$1579 \times 351 =$ _____



$6942 \times 876 =$ _____

PREVIEW

Gain complete access to the largest
collection of worksheets in all subjects!

Members, please
log in to
download this
worksheet.

Not a member?
Please sign up to
gain complete
access.

www.mathworksheets4kids.com