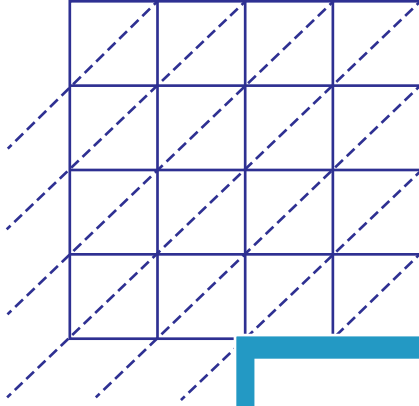


Lattice Multiplication

4-digit: S1

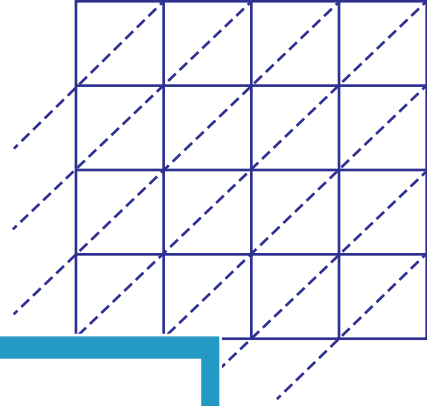
Use lattice multiplication method to find the product in each problem.

1) 4631×7542

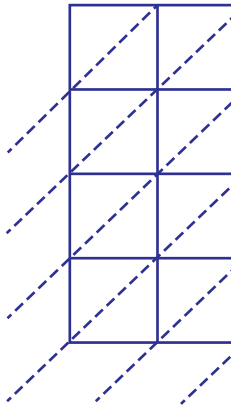


$4631 \times 7542 =$ _____

2) 6585×1370

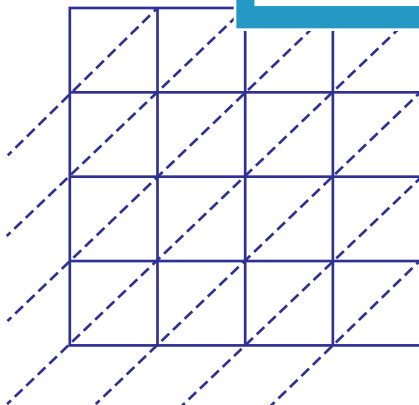


3) 2962×5618



$2962 \times 5618 =$ _____

5) 8412×3773



$8412 \times 3773 =$ _____

PREVIEW

Gain complete access to the largest
collection of worksheets in all subjects!

Members, please
log in to
download this
worksheet.

Not a member?
Please sign up to
gain complete
access.

www.mathworksheets4kids.com