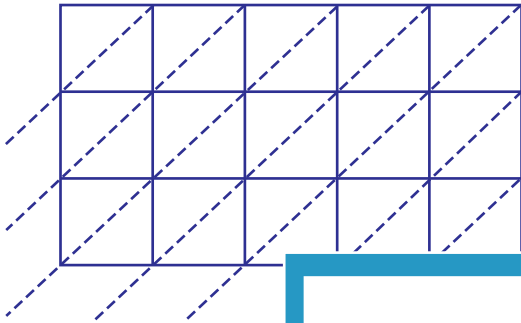


Lattice Multiplication

5-digit by 3-digit: S2

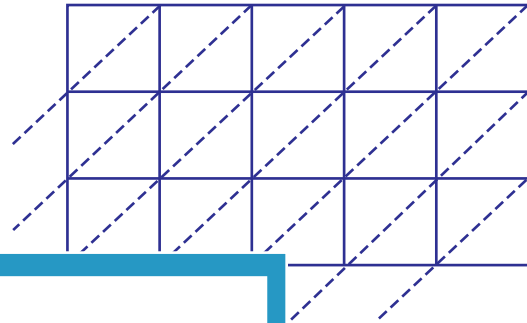
Use lattice multiplication method to find the product in each problem.

1) 79642×530



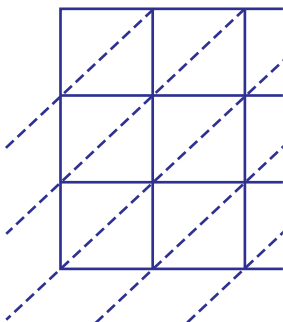
$79642 \times 530 =$ _____

2) 63874×329



$63874 \times 329 =$ _____

3) 30487×285



$30487 \times 285 =$ _____

PREVIEW

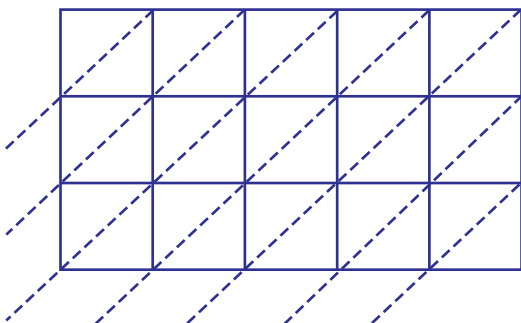
Gain complete access to the largest
collection of worksheets in all subjects!

Members, please
log in to
download this
worksheet.

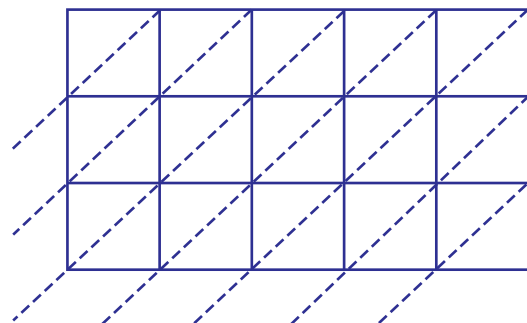
Not a member?
Please sign up to
gain complete
access.

www.mathworksheets4kids.com

5) 18974×657



$18974 \times 657 =$ _____



$53010 \times 731 =$ _____