

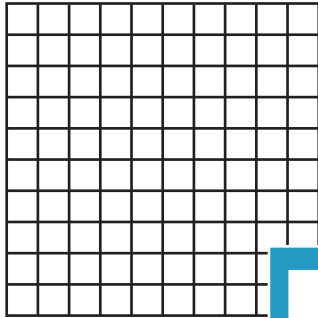
Name : _____

Multiplication Sentence - Area


Draw: S1

Draw an area model to find the answer to each multiplication sentence.


1) $10 \times 2 =$ _____




2) $7 \times 4 =$ _____



3) $3 \times 9 =$ _____



4) $6 \times 6 =$ _____



PREVIEW


Gain complete access to the largest collection of worksheets in all subjects!

Members, please log in to download this worksheet.

Not a member? Please sign up to gain complete access.

www.mathworksheets4kids.com


5) $3 \times 5 =$ _____



7) $4 \times 12 =$ _____



6) $7 =$ _____



9) $5 \times 11 =$ _____

