

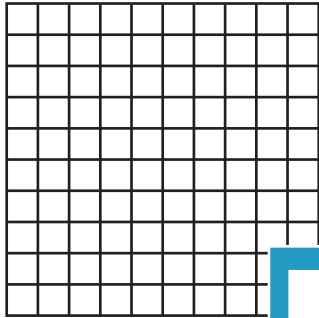
Name : _____

Multiplication Sentence - Area


Draw: S4

Draw an area model to find the answer to each multiplication sentence.


1) $7 \times 6 = \underline{\quad}$




2) $5 \times 3 = \underline{\quad}$




3) $4 \times 8 = \underline{\quad}$



4) $2 \times 7 = \underline{\quad}$




5) $5 \times 3 = \underline{\quad}$




7) $3 \times 12 = \underline{\quad}$



9) $9 = \underline{\quad}$



9) $5 \times 7 = \underline{\quad}$



PREVIEW

Gain complete access to the largest collection of worksheets in all subjects!

Members, please log in to download this worksheet.

Not a member? Please sign up to gain complete access.

www.mathworksheets4kids.com