

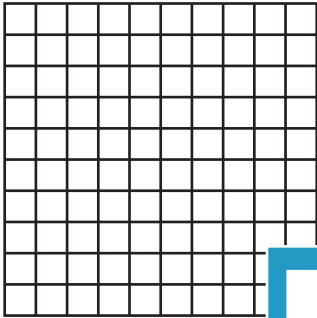
Name : \_\_\_\_\_

## Multiplication Sentence - Area


Draw: S5

Draw an area model to find the answer to each multiplication sentence.


1)  $9 \times 2 = \underline{\quad}$




2)  $10 \times 8 = \underline{\quad}$




3)  $4 \times 7 = \underline{\quad}$




4)  $7 \times 8 = \underline{\quad}$




5)  $2 \times 10 = \underline{\quad}$




7)  $5 \times 12 = \underline{\quad}$



8)  $9 = \underline{\quad}$



9)  $6 \times 8 = \underline{\quad}$



**PREVIEW**

Gain complete access to the largest collection of worksheets in all subjects!

Members, please log in to download this worksheet.

Not a member? Please sign up to gain complete access.

[www.mathworksheets4kids.com](http://www.mathworksheets4kids.com)