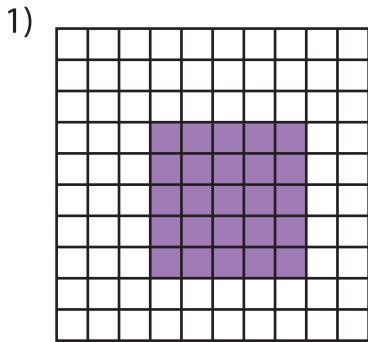


Name : _____

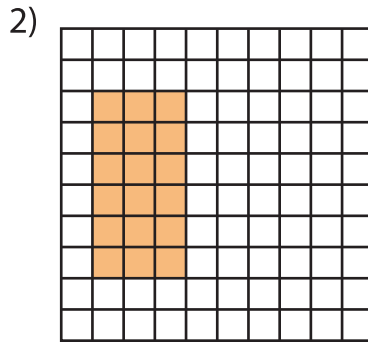
Multiplication Sentence - Area

Mixed: S1

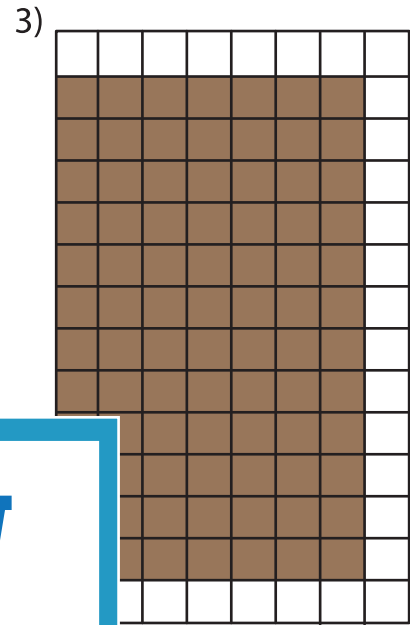
A) Write a multiplication sentence for each model.



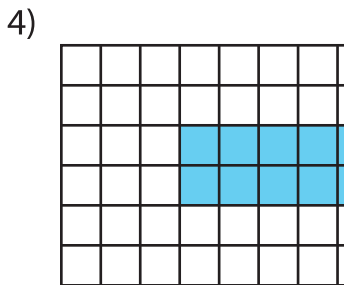
____ × ____ = ____



____ × ____ = ____




____ × ____ = ____



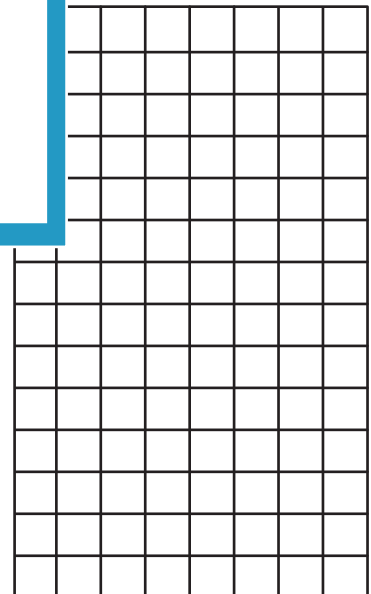
____ × ____ = ____

B) Draw an area model for the multiplication sentence.


1) $7 \times 6 =$ _____



____ × 5 = _____



4) $3 \times 10 =$ _____



PREVIEW

Gain complete access to the largest collection of worksheets in all subjects!

Members, please log in to download this worksheet.

Not a member? Please sign up to gain complete access.

www.mathworksheets4kids.com