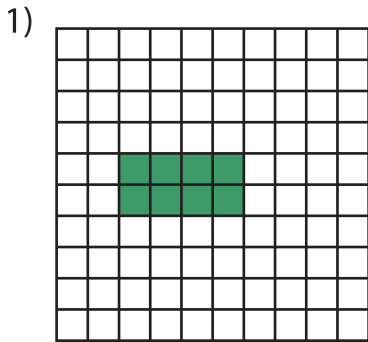


Name : _____

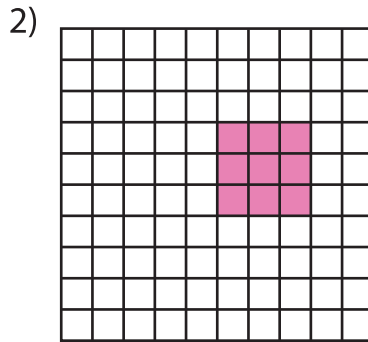
Multiplication Sentence - Area

Mixed: S2

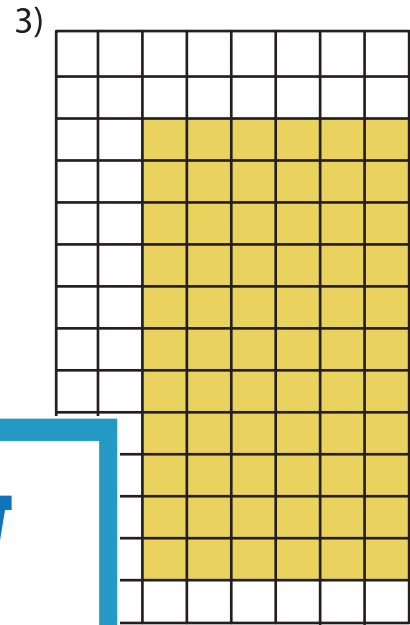
A) Write a multiplication sentence for each model.



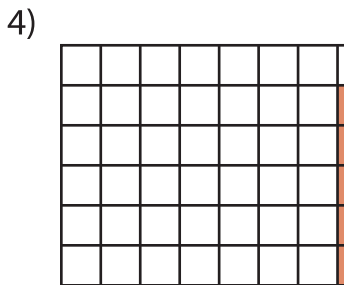
___ × ___ = ___



___ × ___ = ___




___ × ___ = ___



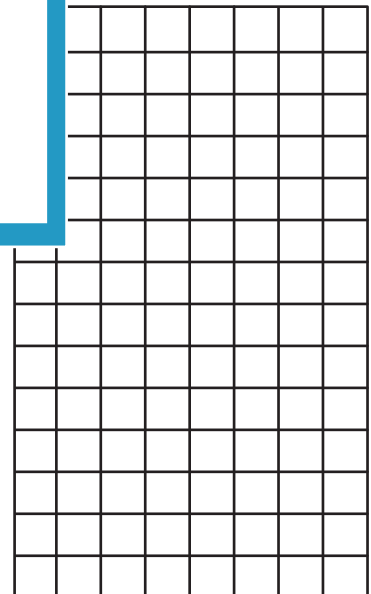
___ × ___ = ___

B) Draw an area model for the multiplication sentence.


1) $3 \times 4 =$ ___



___ × 2 = ___



4) $6 \times 10 =$ ___



PREVIEW

Gain complete access to the largest collection of worksheets in all subjects!

Members, please log in to download this worksheet.

Not a member? Please sign up to gain complete access.

www.mathworksheets4kids.com