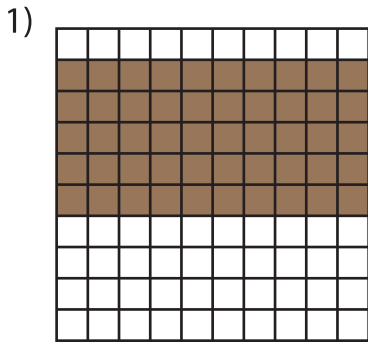


Name : \_\_\_\_\_

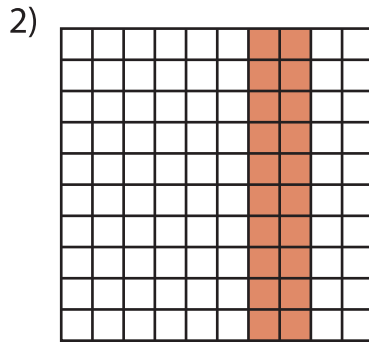
## Multiplication Sentence - Area

Mixed: S4

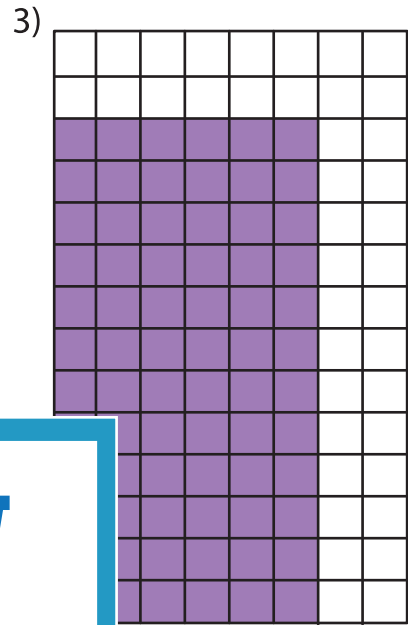
A) Write a multiplication sentence for each model.



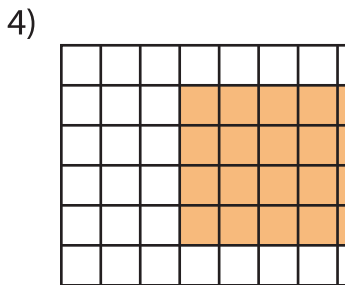
\_\_\_ × \_\_\_ = \_\_\_



\_\_\_ × \_\_\_ = \_\_\_




\_\_\_ × \_\_\_ = \_\_\_



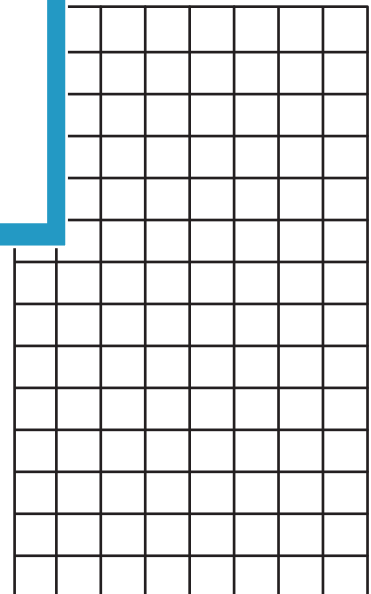

\_\_\_ × \_\_\_ = \_\_\_

B) Draw an area model for the multiplication sentence.

1)  $10 \times 6 =$  \_\_\_\_\_



4)  $3 \times 11 =$  \_\_\_\_\_



Write a multiplication sentence.

\_\_\_ × 8 = \_\_\_\_\_

# PREVIEW

Gain complete access to the largest collection of worksheets in all subjects!

Members, please log in to download this worksheet.

Not a member? Please sign up to gain complete access.

[www.mathworksheets4kids.com](http://www.mathworksheets4kids.com)