

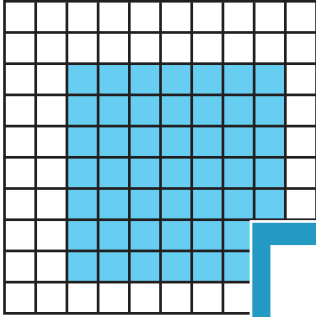
Name : _____

Multiplication Sentence - Area

Write: S3


Write a multiplication sentence for each model.

1)

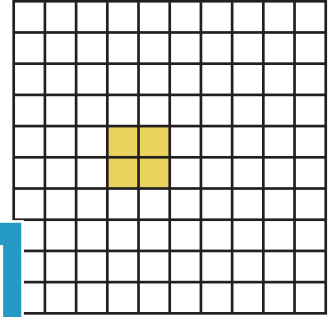


$$\underline{\quad} \times \underline{\quad} = \underline{\quad}$$

2)




3)



$$\underline{\quad} \times \underline{\quad} = \underline{\quad}$$

4)



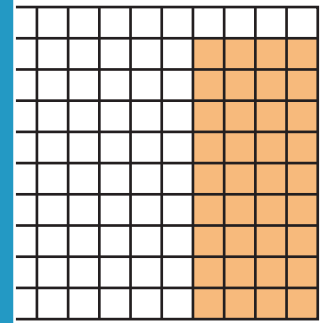
$$\underline{\quad} \times \underline{\quad} = \underline{\quad}$$

Gain complete access to the largest collection of worksheets in all subjects!

Members, please log in to download this worksheet.


Not a member? Please sign up to gain complete access.

www.mathworksheets4kids.com



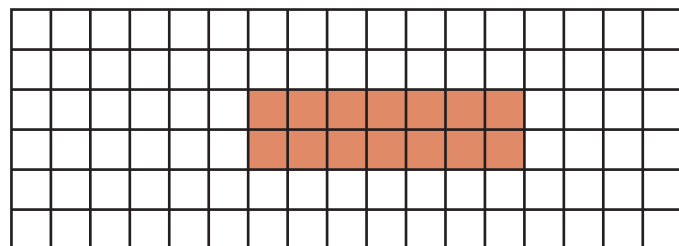
$$\underline{\quad} \times \underline{\quad} = \underline{\quad}$$

7)




$$\underline{\quad} \times \underline{\quad} = \underline{\quad}$$

9)



$$\underline{\quad} \times \underline{\quad} = \underline{\quad}$$



$$\underline{\quad} \times \underline{\quad} = \underline{\quad}$$