

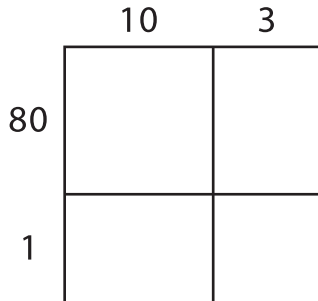
Name: _____

Area Model Multiplication

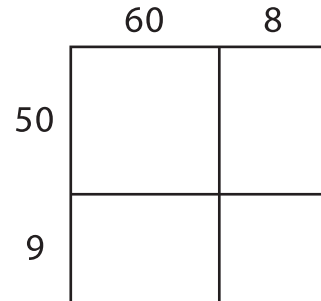
L2S1

A) Find the product using the area model.

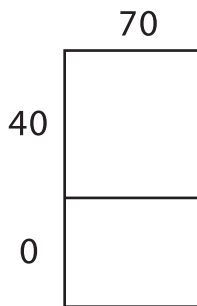
1) $13 \times 81 =$ _____



2) $68 \times 59 =$ _____




3) $72 \times 40 =$ _____



B) Use the area model to solve the problem.


1) $38 \times 16 =$ _____



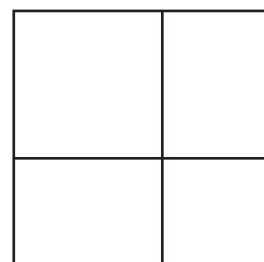
Write the answer in a complete sentence.



3) $87 \times 23 =$ _____



4) $49 \times 64 =$ _____



PREVIEW

Gain complete access to the largest collection of worksheets in all subjects!

Members, please log in to download this worksheet.

Not a member? Please sign up to gain complete access.

www.mathworksheets4kids.com