

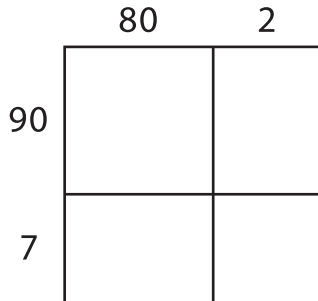
Name: _____

Area Model Multiplication

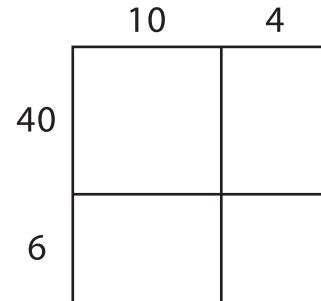
L2S2

A) Find the product using the area model.

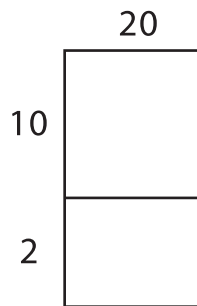
1) $82 \times 97 =$ _____



2) $14 \times 46 =$ _____




3) $29 \times 12 =$ _____



B) Use the area model to solve the problem.


1) $66 \times 24 =$ _____



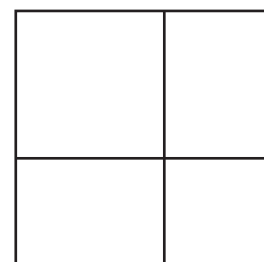
Write the answer in a complete sentence.



3) $48 \times 19 =$ _____



4) $25 \times 31 =$ _____



PREVIEW

Gain complete access to the largest collection of worksheets in all subjects!

Members, please log in to download this worksheet.

Not a member? Please sign up to gain complete access.

www.mathworksheets4kids.com