

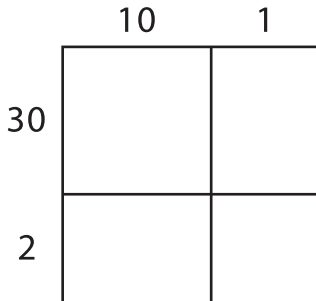
Name: _____

Area Model Multiplication

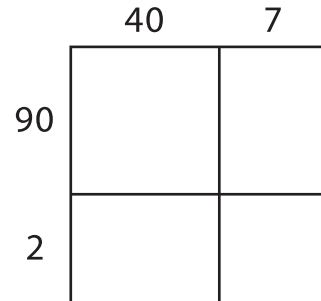
L2S3

A) Find the product using the area model.

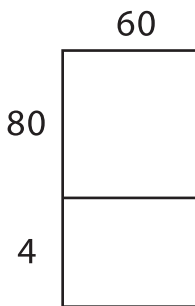
1) $11 \times 32 =$ _____



2) $47 \times 92 =$ _____



3) $65 \times 84 =$ _____



B) Use the area model to solve the problem.

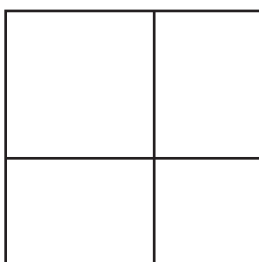
1) $27 \times 69 =$ _____



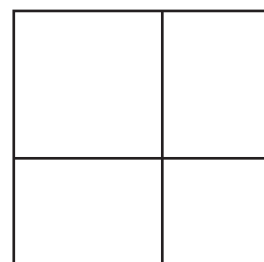
Write the answer in a complete sentence.



3) $36 \times 56 =$ _____



4) $90 \times 77 =$ _____



PREVIEW

Gain complete access to the largest collection of worksheets in all subjects!

Members, please log in to download this worksheet.

Not a member? Please sign up to gain complete access.

www.mathworksheets4kids.com