

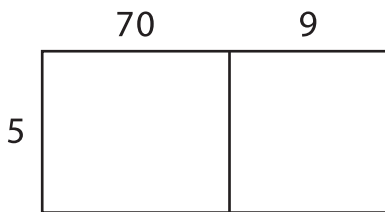
Name: \_\_\_\_\_

## Area Model Multiplication

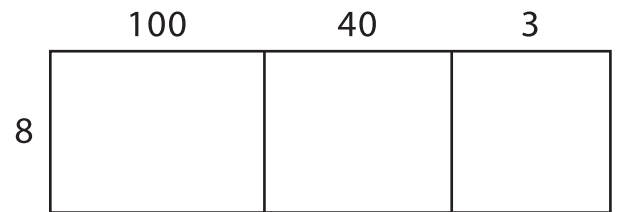
L1S1

A) Find the product using the area model.

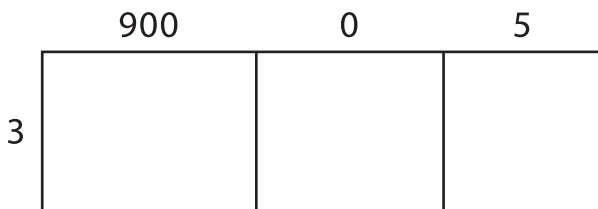
1)  $79 \times 5 =$  \_\_\_\_\_



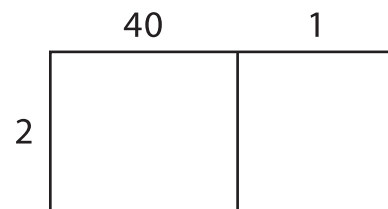
2)  $143 \times 8 =$  \_\_\_\_\_



3)  $905 \times 3 =$  \_\_\_\_\_




4)  $41 \times 2 =$  \_\_\_\_\_




B) Use the area model and complete each multiplication sentence.

1)  $817 \times 6 =$  \_\_\_\_\_



2)  $24 \times 9 =$  \_\_\_\_\_



3)  $36 \times 4 =$  \_\_\_\_\_



4)  $568 \times 7 =$  \_\_\_\_\_

