

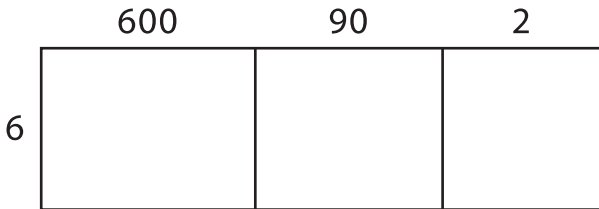
Name: \_\_\_\_\_

## Area Model Multiplication

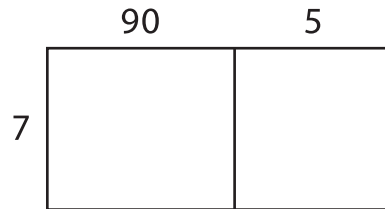
L1S2

A) Find the product using the area model.

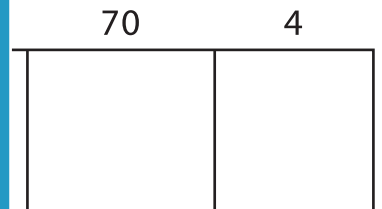
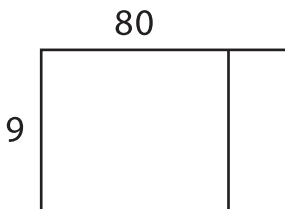
1)  $692 \times 6 =$  \_\_\_\_\_



2)  $95 \times 7 =$  \_\_\_\_\_



3)  $87 \times 9 =$  \_\_\_\_\_



# PREVIEW

Gain complete access to the largest collection of worksheets in all subjects!


Members, please log in to download this worksheet.

Not a member? Please sign up to gain complete access.


[www.mathworksheets4kids.com](http://www.mathworksheets4kids.com)

B) Use the area model to solve the problem.


1)  $53 \times 3 =$  \_\_\_\_\_



2)  $12 \times 4 =$  \_\_\_\_\_



3)  $491 \times 5 =$  \_\_\_\_\_



4)  $18 \times 2 =$  \_\_\_\_\_

