

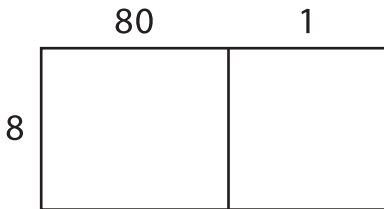
Name: _____

Area Model Multiplication

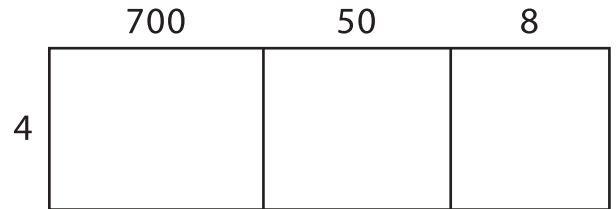
L153

A) Find the product using the area model.

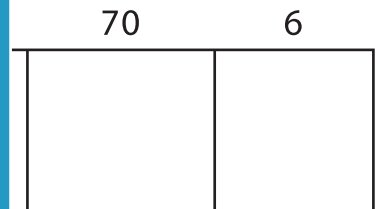
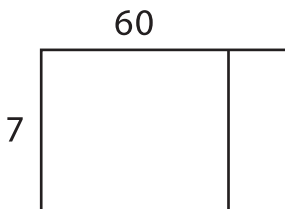
1) $81 \times 8 =$ _____



2) $758 \times 4 =$ _____



3) $63 \times 7 =$ _____



PREVIEW

Gain complete access to the largest collection of worksheets in all subjects!


Members, please log in to download this worksheet.

Not a member? Please sign up to gain complete access.

www.mathworksheets4kids.com

B) Use the area model to solve the problem.


1) $287 \times 9 =$ _____



Write the answer in a complete sentence.



3) $179 \times 2 =$ _____



4) $44 \times 5 =$ _____

