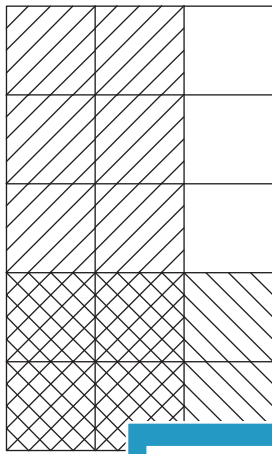


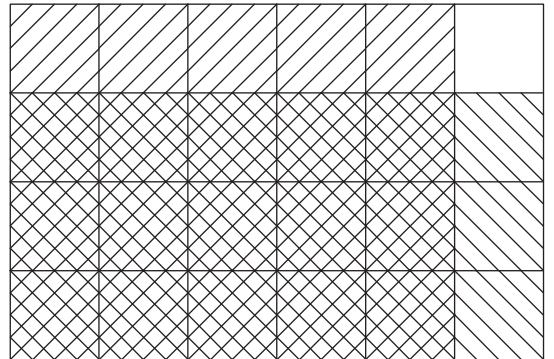
# Multiplying Missing Fractions - Area Model

Complete each multiplication equation using the area model.

1)

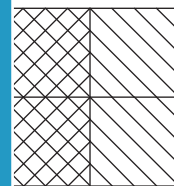
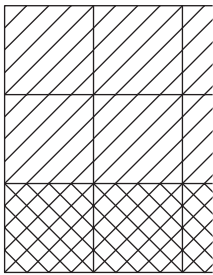


2)



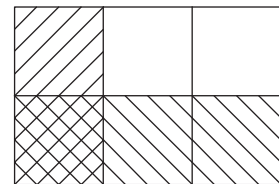
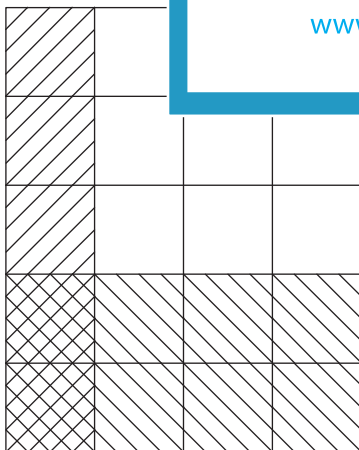
\_\_\_\_\_  $\times$   $\frac{2}{5}$  = \_\_\_\_\_  $=$   $\frac{15}{24}$

3)



$\frac{3}{5}$   $\times$   $\frac{1}{3}$  =  $\frac{2}{2}$  =  $\frac{2}{4}$

5)



$\frac{1}{4}$   $\times$  \_\_\_\_\_ =  $\frac{2}{20}$        $\frac{1}{3}$   $\times$   $\frac{1}{2}$  = \_\_\_\_\_

**PREVIEW**

Gain complete access to the largest collection of worksheets in all subjects!

Members, please log in to download this worksheet.

Not a member? Please sign up to gain complete access.

[www.mathworksheets4kids.com](http://www.mathworksheets4kids.com)