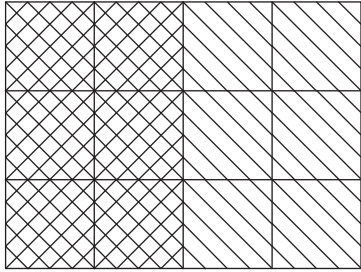


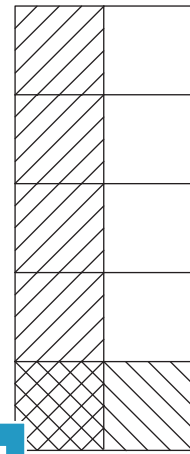
Multiplying Missing Fractions - Area Model

Complete each multiplication equation using the area model.

1)




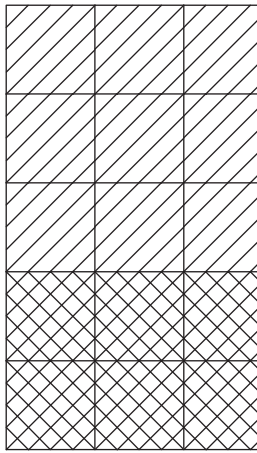
2)



$\frac{2}{4} \times \underline{\hspace{2cm}}$

$\frac{1}{5} = \underline{\hspace{2cm}}$

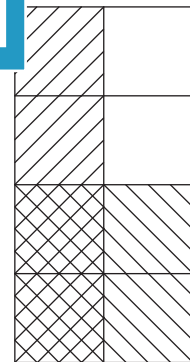
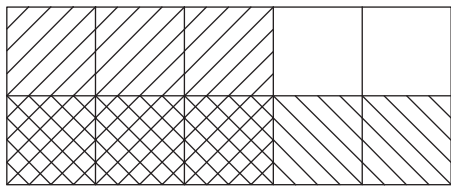
3)



$\underline{\hspace{2cm}} \times \frac{2}{5}$

$\underline{\hspace{2cm}} = \frac{4}{9}$

5)



$\frac{3}{5} \times \frac{1}{2} = \underline{\hspace{2cm}}$

$\underline{\hspace{2cm}} \times \frac{2}{4} = \frac{2}{8}$

PREVIEW

Gain complete access to the largest collection of worksheets in all subjects!

Members, please log in to download this worksheet.

Not a member? Please sign up to gain complete access.

www.mathworksheets4kids.com