



Completing Multiplication Equations

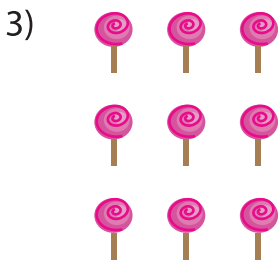
Complete the multiplication equation that describes each array.



$$4 \times \square$$




$$3 = 9$$




$$\square \times 5$$




$$\square = 10$$




$$4 \times \square = 16$$



$$\square \times 3 = 12$$



$$\square \times 5 = 25$$



$$4 \times \square = 20$$

PREVIEW

Gain complete access to the largest collection of worksheets in all subjects!

Members, please log in to download this worksheet.

Not a member? Please sign up to gain complete access.

www.mathworksheets4kids.com