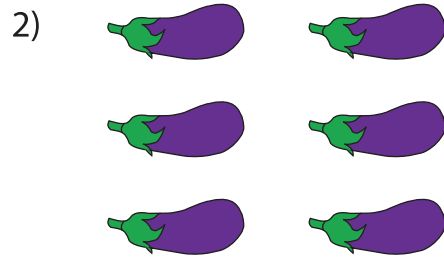


Completing Multiplication Equations


Complete the multiplication equation that describes each array.



$$\square \times 5$$



$$\square = 6$$



$$2 \times \square$$


PREVIEW

Gain complete access to the largest collection of worksheets in all subjects!

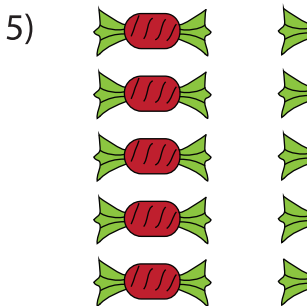
Members, please log in to download this worksheet.

Not a member? Please sign up to gain complete access.

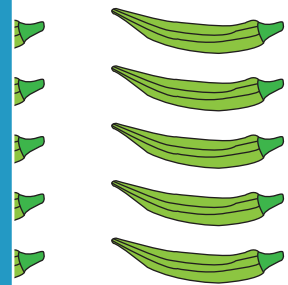
www.mathworksheets4kids.com




$$4 = 12$$




$$\square \times 3 = 15$$



$$5 \times \square = 10$$



$$2 \times \square = 6$$



$$\square \times 2 = 4$$