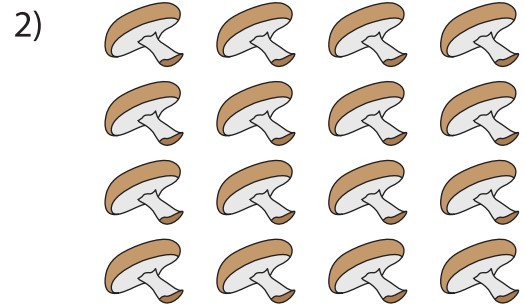




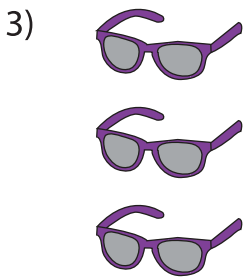
Completing Multiplication Equations

Complete the multiplication equation that describes each array.



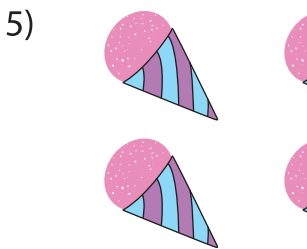
× 4

4 = 16




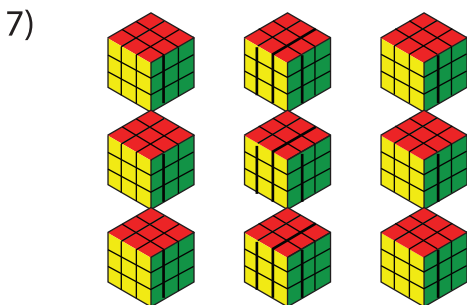
3 ×

= 10



× 2 = 4

× 4 = 8



3 × = 9

2 × = 6

PREVIEW
Gain complete access to the largest collection of worksheets in all subjects!

Members, please log in to download this worksheet.

Not a member? Please sign up to gain complete access.

www.mathworksheets4kids.com