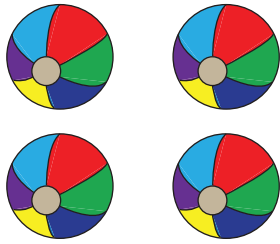


## Completing Multiplication Equations


Complete the multiplication equation that describes each array.

1)




$2 \times \square$

2)




$\square = 12$

3)




$\square \times 5$

**PREVIEW**  
Gain complete access to the largest collection of worksheets in all subjects!



$3 = 6$

5)




$3 \times \square = 12$

Members, please log in to download this worksheet.

Not a member? Please sign up to gain complete access.

[www.mathworksheets4kids.com](http://www.mathworksheets4kids.com)



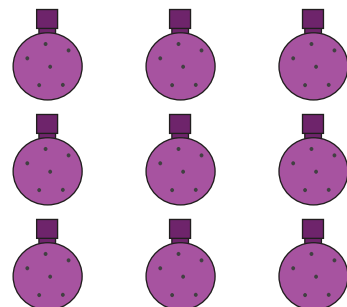
$5 \times \square = 10$

7)



$\square \times 4 = 8$

8)



$\square \times 3 = 9$