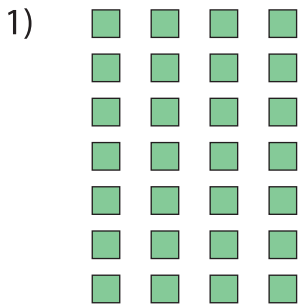



## Completing Multiplication Equations

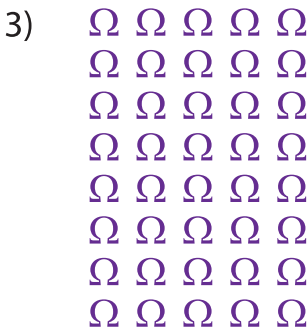
Complete the multiplication equation that describes each array.



× 4



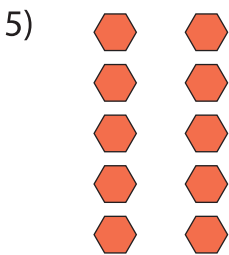
= 60




8 ×



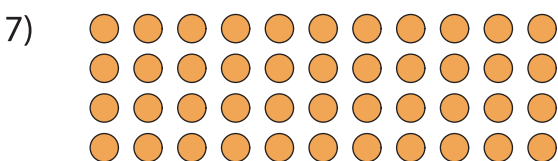
3 = 12



× 2 = 10



12 ×  = 72



4 ×  = 44

# PREVIEW

Gain complete access to the largest collection of worksheets in all subjects!

Members, please log in to download this worksheet.

Not a member? Please sign up to gain complete access.

www.mathworksheets4kids.com