



Completing Multiplication Equations

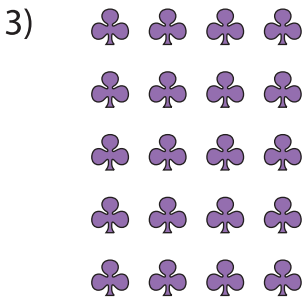
Complete the multiplication equation that describes each array.



$4 \times \square$



$\square = 48$



$\square \times 7$

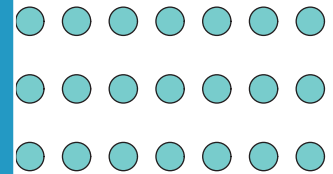
PREVIEW

Gain complete access to the largest collection of worksheets in all subjects!


Members, please log in to download this worksheet.

Not a member? Please sign up to gain complete access.

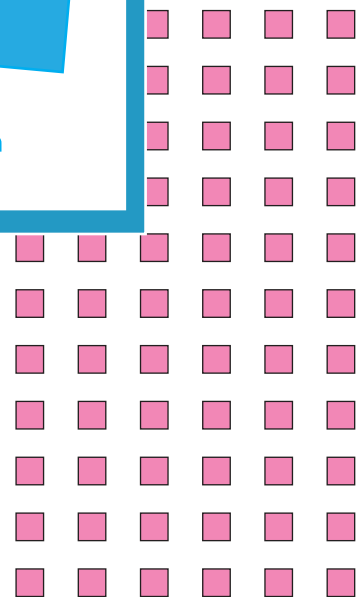
www.mathworksheets4kids.com



$10 = 30$



$8 \times \square = 40$



$\square \times 10 = 20$

$11 \times \square = 66$