



Completing Multiplication Equations

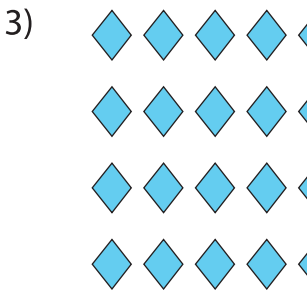
Complete the multiplication equation that describes each array.



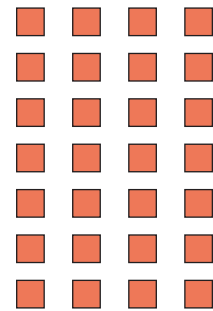
$$\square \times 6$$




$$\square = 56$$




$$\square \times 10$$



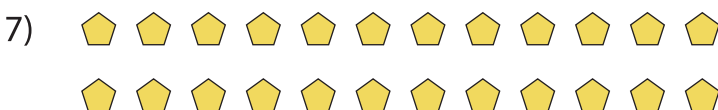
$$\square = 49$$



$$8 \times \square = 40$$



$$11 \times \square = 77$$



$$\square \times 12 = 24$$

PREVIEW

Gain complete access to the largest collection of worksheets in all subjects!

Members, please log in to download this worksheet.

Not a member? Please sign up to gain complete access.

www.mathworksheets4kids.com