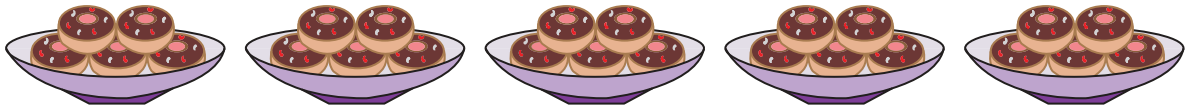


Equal Groups: Multiplication Sentence


Complete the multiplication equation that describes each model.

1)



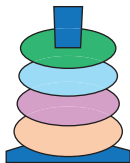
$$5 \times \square = 25$$

2)



Gain complete access to the largest
collection of worksheets in all subjects!

3)



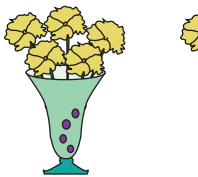
2

Members, please
log in to
download this
worksheet.

Not a member?
Please sign up to
gain complete
access.

www.mathworksheets4kids.com

4)



$$\square \times 5 = 15$$

5)



$$4 \times \square = 16$$