


## Equal Groups: Multiplication Sentence


Complete the multiplication equation that describes each model.

1)



$$\square \times 3 = 9$$

2)



2 :

**PREVIEW**


Gain complete access to the largest  
collection of worksheets in all subjects!

Members, please  
log in to  
download this  
worksheet.

Not a member?  
Please sign up to  
gain complete  
access.

[www.mathworksheets4kids.com](http://www.mathworksheets4kids.com)

3)




$$\square$$

4)



$$5 \times \square = 10$$

5)



$$\square \times 2 = 8$$