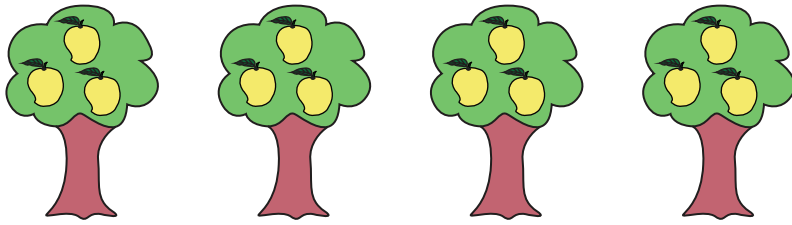


## Equal Groups: Multiplication Sentence


Complete the multiplication equation that describes each model.

1)




$$4 \times \square = \square$$

2)




$$\square \times 2 = \square$$

3)



$$5 \times \square = \square$$

4)



$$\square \times 3 = 6$$

5)



$$5 \times \square = 20$$

# PREVIEW

Gain complete access to the largest collection of worksheets in all subjects!

Members, please log in to download this worksheet.

Not a member? Please sign up to gain complete access.

[www.mathworksheets4kids.com](http://www.mathworksheets4kids.com)