


Name : _____

Equal Groups: Multiplication Sentence

Identify-L1S3

A) Identify the multiplication sentence that describes each model.

1)



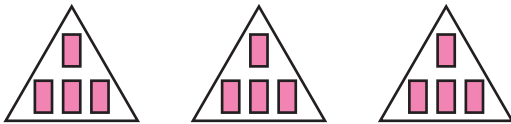
a) 1×2

b) 2×3

c) 2×2


d) 1×3

2)



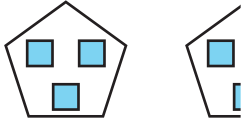
a) 2×4

3)



a) 5×2

4)



a) 1×3

PREVIEW

Gain complete access to the largest collection of worksheets in all subjects!

Members, please log in to download this worksheet.

Not a member? Please sign up to gain complete access.

www.mathworksheets4kids.com

B) Draw equal groups

and write the multiplication sentence.

1) $4 \times 4 =$ _____



2) $3 \times 5 =$ _____

