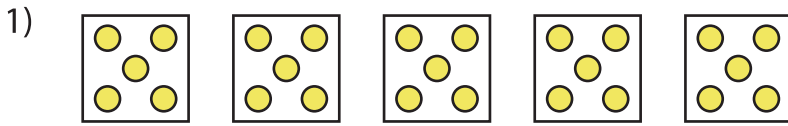


Name : \_\_\_\_\_

## Equal Groups: Multiplication Sentence

Identify-L1S4

A) Identify the multiplication sentence that describes each model.



- a)  $4 \times 5$       b)  $5 \times 1$       c)  $3 \times 5$       d)  $5 \times 5$



- a)  $2 \times 4$



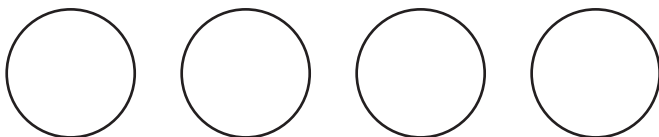
- a)  $5 \times 5$



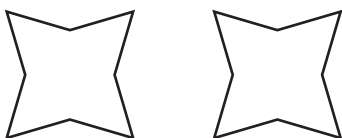
- a)  $3 \times 2$

B) Draw equal groups \_\_\_\_\_ multiplication sentence.

1)  $4 \times 3 =$  \_\_\_\_\_



2)  $2 \times 2 =$  \_\_\_\_\_



**PREVIEW**

Gain complete access to the largest collection of worksheets in all subjects!

Members, please log in to download this worksheet.

Not a member? Please sign up to gain complete access.

[www.mathworksheets4kids.com](http://www.mathworksheets4kids.com)