


## Equal Groups: Multiplication Sentence


Write a multiplication sentence that describes each model.

1)




\_\_\_\_\_ × \_\_\_\_\_ = \_\_\_\_\_

2)



\_\_\_\_\_ × \_\_\_\_\_ = \_\_\_\_\_

3)



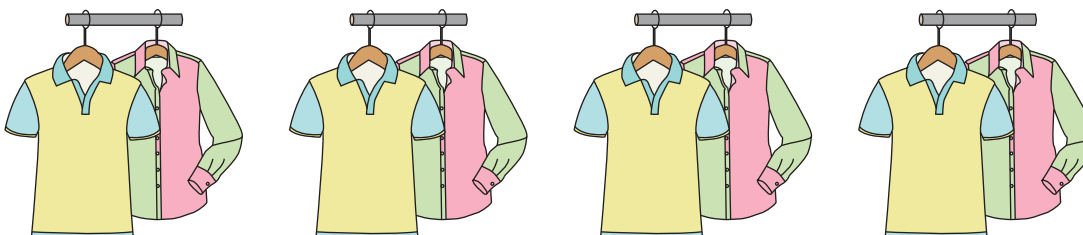
\_\_\_\_\_ × \_\_\_\_\_ = \_\_\_\_\_

4)



\_\_\_\_\_ × \_\_\_\_\_ = \_\_\_\_\_

5)



\_\_\_\_\_ × \_\_\_\_\_ = \_\_\_\_\_

# PREVIEW

Gain complete access to the largest collection of worksheets in all subjects!

Members, please log in to download this worksheet.

Not a member? Please sign up to gain complete access.

[www.mathworksheets4kids.com](http://www.mathworksheets4kids.com)