

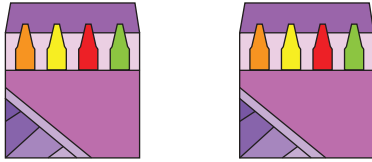
Name : \_\_\_\_\_

## Equal Groups: Multiplication Sentence

Write-L1S5

Write a multiplication sentence that describes each model.

1)



$$\underline{\quad} \times \underline{\quad} = \underline{\quad}$$

2)



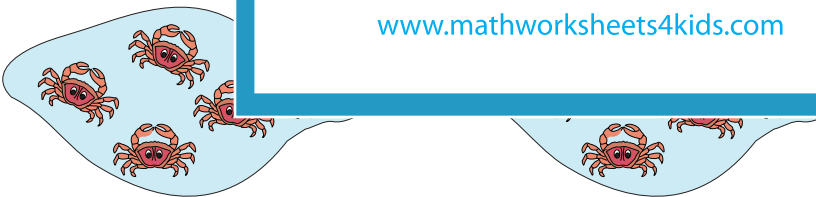
$$\underline{\quad} \times \underline{\quad} = \underline{\quad}$$

3)




$$\underline{\quad} \times \underline{\quad} = \underline{\quad}$$

4)



$$\underline{\quad} \times \underline{\quad} = \underline{\quad}$$

5)



$$\underline{\quad} \times \underline{\quad} = \underline{\quad}$$

**PREVIEW**

Gain complete access to the largest collection of worksheets in all subjects!

Members, please log in to download this worksheet.

Not a member? Please sign up to gain complete access.

[www.mathworksheets4kids.com](http://www.mathworksheets4kids.com)