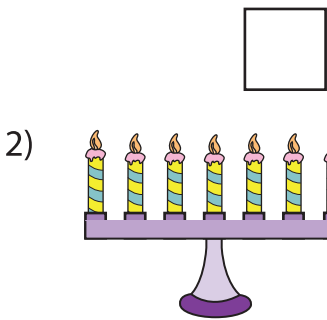
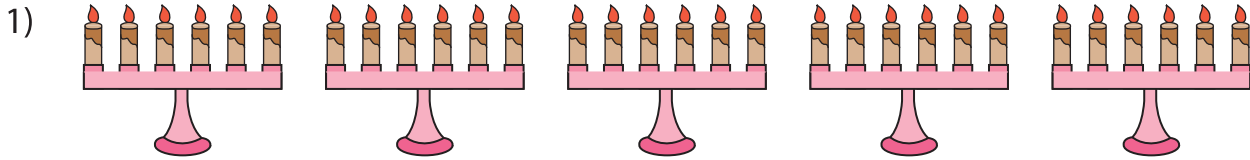
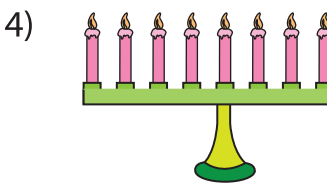


Equal Groups: Multiplication Sentence

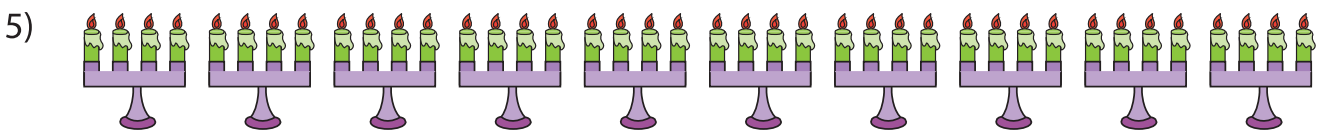
Complete the multiplication equation that describes each model.



2 ×



4 × = 36



× 4 = 40

PREVIEW

Gain complete access to the largest collection of worksheets in all subjects!

Members, please log in to download this worksheet.

Not a member? Please sign up to gain complete access.

www.mathworksheets4kids.com