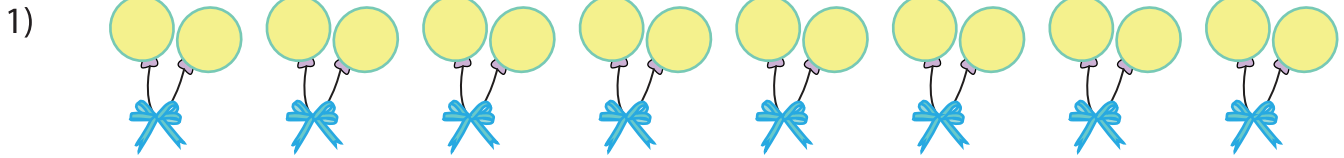




Equal Groups: Multiplication Sentence


Complete the multiplication equation that describes each model.



$$8 \times \square = 16$$



$$6 \times \square = 30$$



$$\square \times 3 = 21$$

PREVIEW

Gain complete access to the largest collection of worksheets in all subjects!

Members, please log in to download this worksheet.

Not a member? Please sign up to gain complete access.

www.mathworksheets4kids.com