
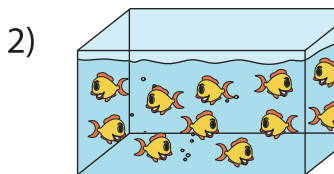


Equal Groups: Multiplication Sentence

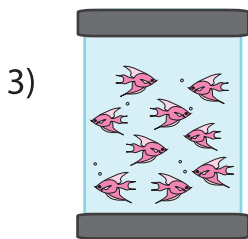
Complete the multiplication equation that describes each model.



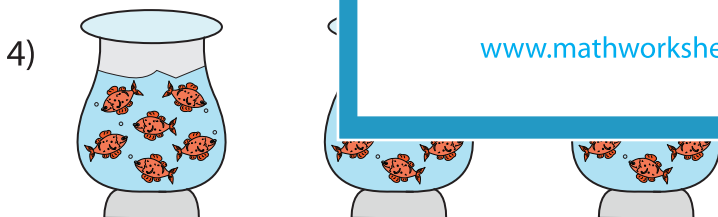
$$\square \times 8 = 24$$



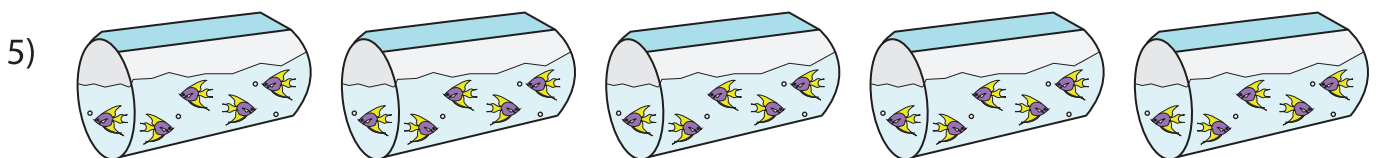
2 :



5 :



$$\square \times 6 = 18$$



$$5 \times \square = 25$$

PREVIEW

Gain complete access to the largest collection of worksheets in all subjects!

Members, please log in to download this worksheet.

Not a member? Please sign up to gain complete access.

www.mathworksheets4kids.com