


Name : _____

Equal Groups: Multiplication Sentence

Complete-L2S5


Complete the multiplication equation that describes each model.

1)




$$\square \times 5 = 15$$

2)




$$\square$$

3)



$$7 \times \square$$

4)



$$4 \times \square = 28$$

5)



$$\square \times 3 = 15$$

PREVIEW

Gain complete access to the largest collection of worksheets in all subjects!

Members, please log in to download this worksheet.

Not a member? Please sign up to gain complete access.

www.mathworksheets4kids.com