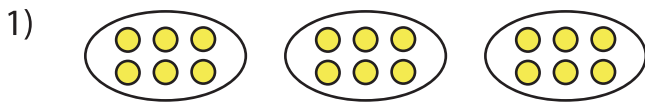


Name : _____

Equal Groups: Multiplication Sentence

Identify-L2S1

A) Identify the multiplication sentence that describes each model.



a) 1×6


b) 3×4

c) 3×3

d) 3×6



a) 6×4



a) 3×10

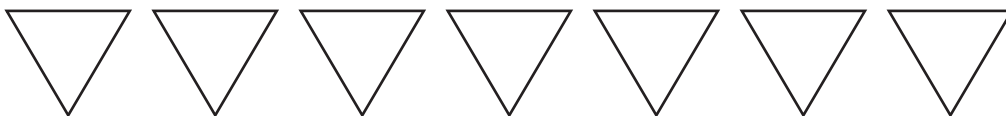


a) 6×5


B) Draw equal groups

_____ multiplication sentence.

1) $7 \times 3 =$ _____



2) $4 \times 9 =$ _____



PREVIEW

Gain complete access to the largest collection of worksheets in all subjects!

Members, please log in to download this worksheet.

Not a member? Please sign up to gain complete access.

www.mathworksheets4kids.com