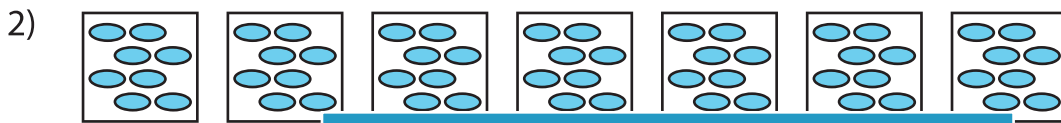


Equal Groups: Multiplication Sentence


A) Identify the multiplication sentence that describes each model.



- a) 6×3 b) 3×4 c) 3×4 d) 3×1



- a) 1×8



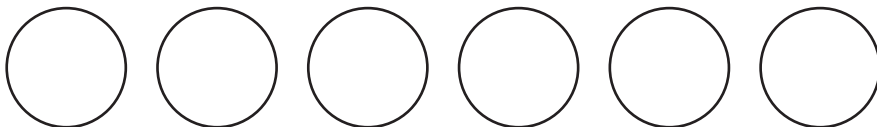
- a) 11×12



- a) 8×8

B) Draw equal groups

1) $6 \times 6 =$ _____



2) $3 \times 11 =$ _____



PREVIEW

Gain complete access to the largest collection of worksheets in all subjects!

Members, please log in to download this worksheet.

Not a member? Please sign up to gain complete access.

www.mathworksheets4kids.com

ication sentence.