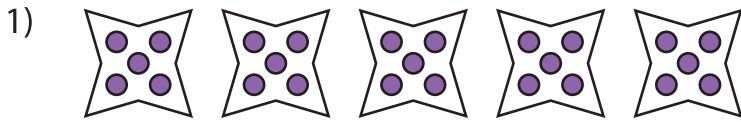



Equal Groups: Multiplication Sentence

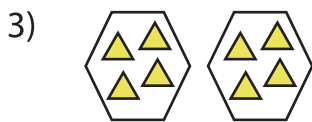
A) Identify the multiplication sentence that describes each model.



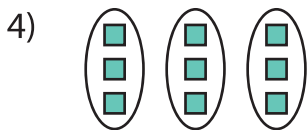
- a) 5×5 b) 4×5 c) 1×5 d) 3×5



- a) 1×8



- a) 4×1



- a) 11×3

PREVIEW

Gain complete access to the largest collection of worksheets in all subjects!

Members, please log in to download this worksheet.

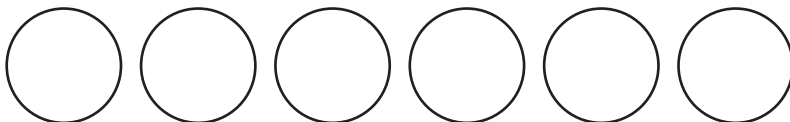
Not a member? Please sign up to gain complete access.

www.mathworksheets4kids.com

B) Draw equal groups

_____ multiplication sentence.

1) $6 \times 3 =$ _____



2) $8 \times 2 =$ _____

