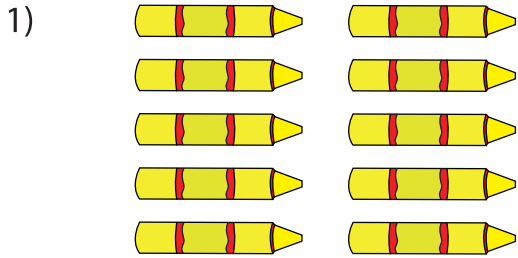



Multiplication Sentence: Arrays


Write a multiplication sentence that describes each array.



_____ × _____



_____ = _____



_____ × _____

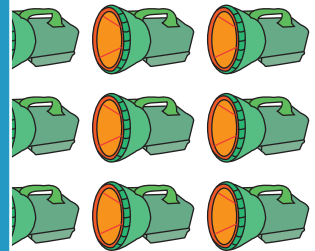
PREVIEW

Gain complete access to the largest collection of worksheets in all subjects!


Members, please log in to download this worksheet.

Not a member? Please sign up to gain complete access.


www.mathworksheets4kids.com




_____ = _____




_____ × _____ = _____



_____ × _____ = _____



_____ × _____ = _____



_____ × _____ = _____