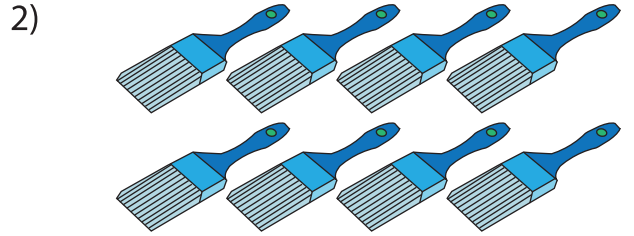




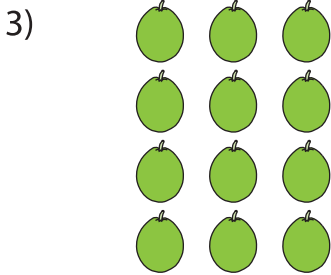
Multiplication Sentence: Arrays

Write a multiplication sentence that describes each array.



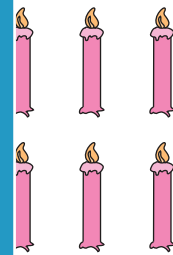

_____ × _____

_____ = _____




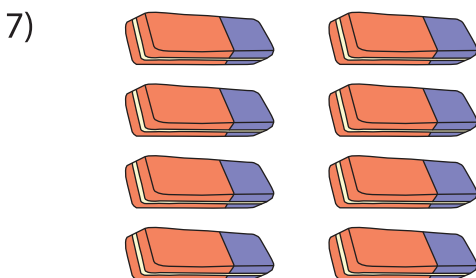
_____ × _____

_____ = _____



_____ × _____ = _____

_____ × _____ = _____



_____ × _____ = _____

_____ × _____ = _____

PREVIEW

Gain complete access to the largest collection of worksheets in all subjects!

Members, please log in to download this worksheet.

Not a member? Please sign up to gain complete access.

www.mathworksheets4kids.com