


Multiplication Sentence: Arrays


Write a multiplication sentence that describes each array.

1)




_____ × _____

2)



_____ = _____

3)



_____ × _____


PREVIEW

Gain complete access to the largest collection of worksheets in all subjects!

Members, please log in to download this worksheet.


Not a member? Please sign up to gain complete access.

www.mathworksheets4kids.com




_____ = _____

5)




_____ × _____ = _____




_____ × _____ = _____

7)



_____ × _____ = _____

8)



_____ × _____ = _____