



## Multiplication Sentence: Arrays

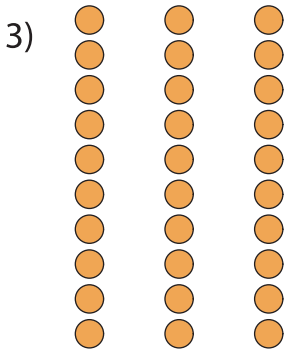
Write a multiplication sentence that describes each array.




\_\_\_\_\_ × \_\_\_\_\_



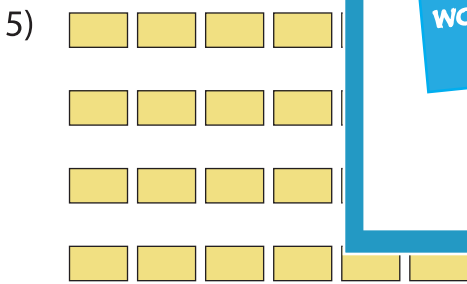
\_\_\_\_\_ = \_\_\_\_\_




\_\_\_\_\_ × \_\_\_\_\_




\_\_\_\_\_ = \_\_\_\_\_



\_\_\_\_\_ × \_\_\_\_\_ = \_\_\_\_\_



\_\_\_\_\_ × \_\_\_\_\_ = \_\_\_\_\_



\_\_\_\_\_ × \_\_\_\_\_ = \_\_\_\_\_

# PREVIEW

Gain complete access to the largest collection of worksheets in all subjects!

Members, please log in to download this worksheet.

Not a member? Please sign up to gain complete access.

www.mathworksheets4kids.com