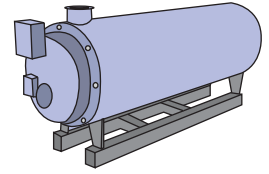


Name : _____

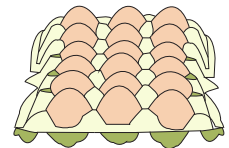
2-Digit Multiplication

Sheet 2

- 1) A two-ton boiler consumes 22 gallons of fuel a day. How many gallons of fuel will the boiler consume in 17 days?



- 2) If a large egg contains 70 calories of energy, how many calories of energy would 18 such eggs contain?

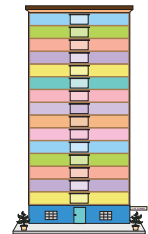


- 3) John lives on the _____ floor and there is a parking garage on the first floor. How many steps will he need to go up to his apartment?

Gain complete access to the largest collection of worksheets in all subjects!

Members, please log in to download this worksheet.

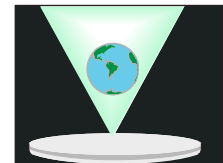
Not a member? Please sign up to gain complete access.



- 4) 12 different decorative punch holes are used to create a pattern. How many punch holes are there in total?

_____ patterns?

www.mathworksheets4kids.com



- 5) In the event of a blackout, a commercial building uses 16 portable generators to light up a single floor. How many generators will be required to light up 19 floors in the building?

