


Name : \_\_\_\_\_

## 2-Digit by 1-Digit Multiplication


Sheet 2

- 1) John has 8 spare bicycle wheels in his garage. If each wheel has 32 spokes in them, how many spokes do all the wheels have in total?



\_\_\_\_\_

- 2) During the Fourth of July parade, children are made to stand in 10 rows that have 3 columns each. How many children in total are performing at the parade?



\_\_\_\_\_

- 3) Lara requires 8 inches of ribbon for a project. How many inches of ribbon will she require to complete the project?

**PREVIEW**  
Gain complete access to the largest collection of worksheets in all subjects!

Members, please log in to download this worksheet.

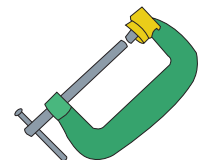
Not a member? Please sign up to gain complete access.



\_\_\_\_\_

- 4) Kirk's mansion needs 1200 feet of pipe. How many such pipes does he need to lay a water pipe at the mansion?

\_\_\_\_\_



\_\_\_\_\_

- 5) Kylie, Linda and Jack visit a cafe. They buy 3 packs of espresso ground coffee. If each pack costs \$26, how much do they spend on their purchase?



\_\_\_\_\_