


Name : _____

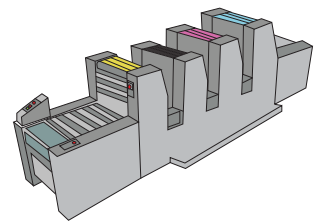
3-Digit Multiplication

Sheet 1

- 1) Rachel sells oval pot planters. A particular variety was priced at \$109. She sold 110 such pot planters. What was the revenue generated from the sales she made?



- 2) A web offset printer can print 500 copies in one minute. How many copies can be produced in 120 minutes?

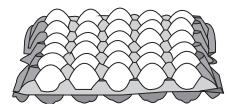


- 3) A distributor supplies 1200 copies of a book to a local store. The store sells an average of 100 copies per day. Find the average number of days it will take to sell the books.

PREVIEW
Gain complete access to the largest collection of worksheets in all subjects!


Members, please log in to download this worksheet.

Not a member? Please sign up to gain complete access.



- 4) A public library has 1200 books. If the library has 100 books in all does it have 100 books each, how many books does it have?

www.mathworksheets4kids.com



- 5) Julia uses the treadmill and sets a target to burn 550 calories a day. How many calories can she burn in 145 days if she strictly sticks to her target?

