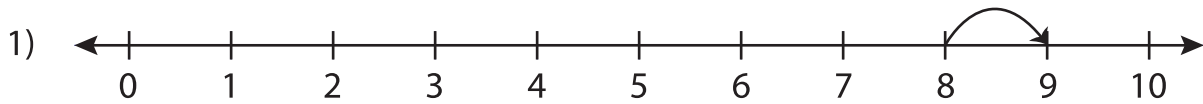


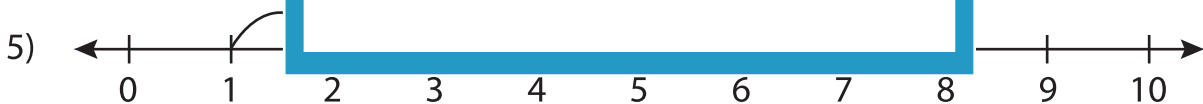
# Number Line Addition

0-10: S2

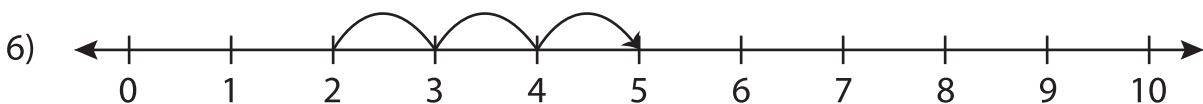
Read each number line and solve the problem.



$$8 + 1 = \square$$



$$1 + 3 = \square$$



$$2 + 3 = \square$$

**PREVIEW**

Gain complete access to the largest collection of worksheets in all subjects!

Members, please log in to download this worksheet.

Not a member? Please sign up to gain complete access.

[www.mathworksheets4kids.com](http://www.mathworksheets4kids.com)