

Name : _____

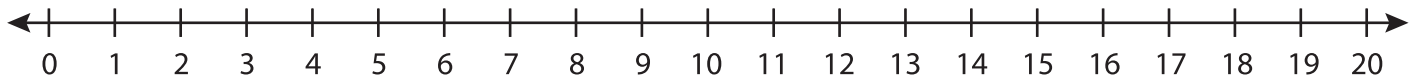
Score : _____

Number Line Addition

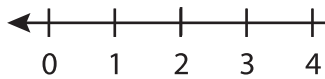
Three addends: S1

Indicate hops on each number line and complete the addition sentences.

1) $9 + 1 + 3 =$ _____



2) $13 + 4 + 1 =$ _____



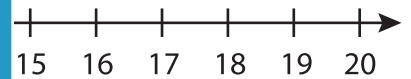
PREVIEW

Gain complete access to the largest
collection of worksheets in all subjects!

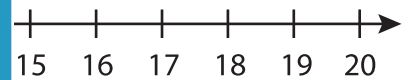
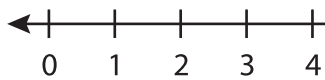
Members, please
log in to
download this
worksheet.

Not a member?
Please sign up to
gain complete
access.

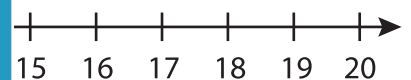
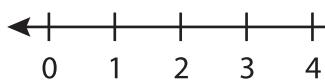
www.mathworksheets4kids.com



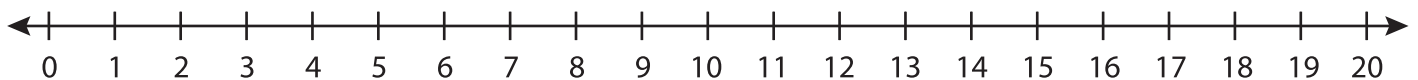
3) $7 + 3 + 10 =$ _____



4) $3 + 12 + 2 =$ _____



5) $2 + 4 + 9 =$ _____



6) $1 + 7 + 8 =$ _____

