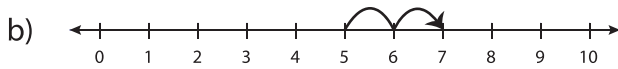
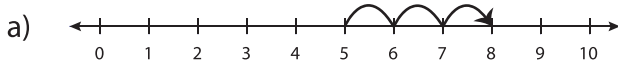


# Number Line Addition - MCQ

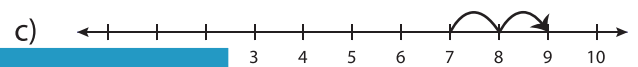
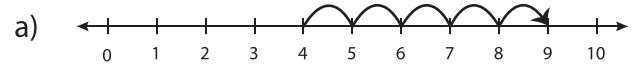
Sheet 1

Identify the correct number line for each addition sentence.

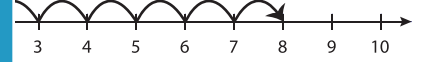
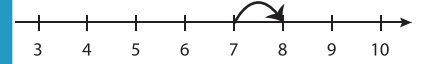
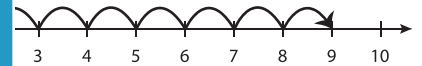
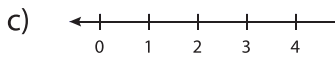
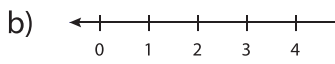
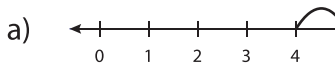
1)  $5 + 3 = 8$



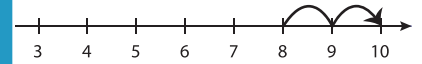
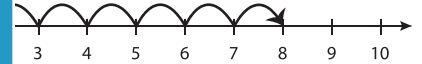
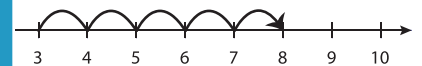
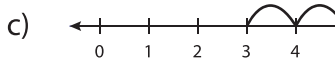
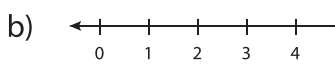
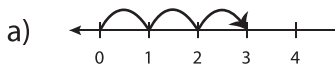
2)  $7 + 2 = 9$



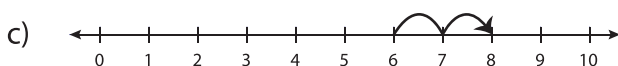
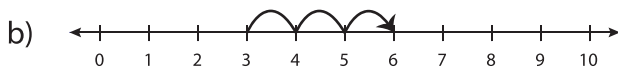
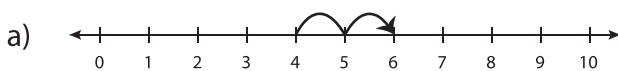
3)  $6 + 4 = 10$



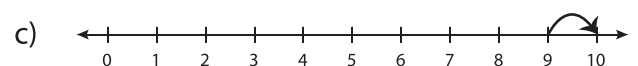
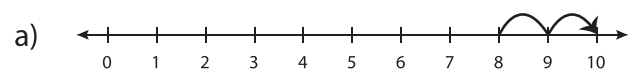
5)  $3 + 3 = 6$



7)  $4 + 2 = 6$



8)  $9 + 1 = 10$



# PREVIEW

Gain complete access to the largest collection of worksheets in all subjects!

Members, please log in to download this worksheet.

Not a member? Please sign up to gain complete access.

[www.mathworksheets4kids.com](http://www.mathworksheets4kids.com)