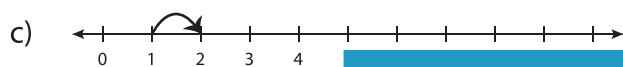
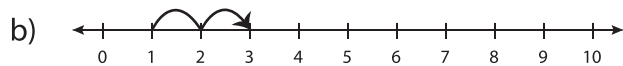


Number Line Addition - MCQ

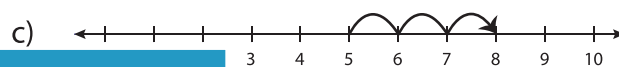
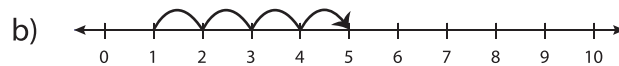
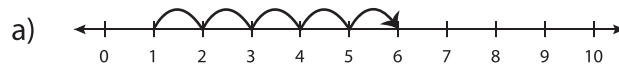
Sheet 3

Identify the correct number line for each addition sentence.

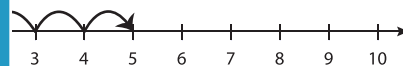
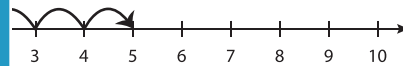
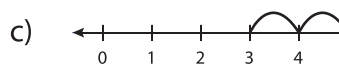
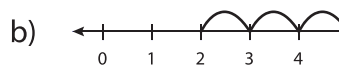
1) $1 + 2 = 3$



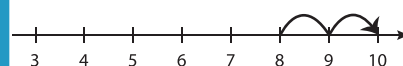
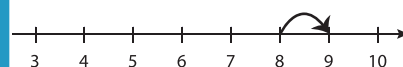
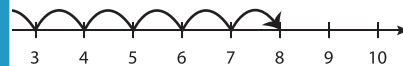
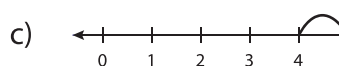
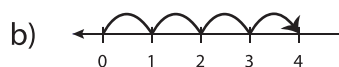
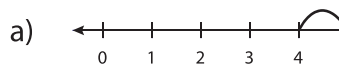
2) $1 + 5 = 6$



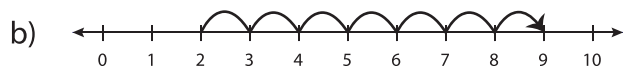
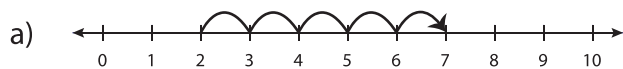
3) $3 + 4 = 7$



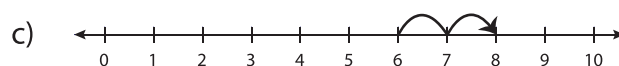
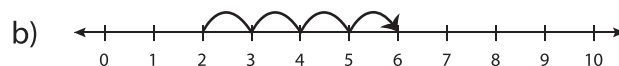
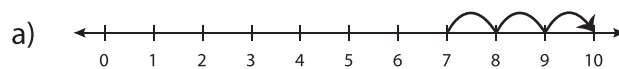
5) $4 + 6 = 10$



7) $2 + 7 = 9$



8) $6 + 2 = 8$



PREVIEW

Gain complete access to the largest
collection of worksheets in all subjects!

Members, please
log in to
download this
worksheet.

Not a member?
Please sign up to
gain complete
access.

www.mathworksheets4kids.com